

Organic Lewis Structures 2

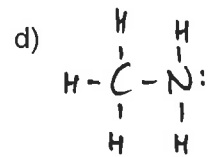
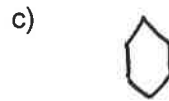
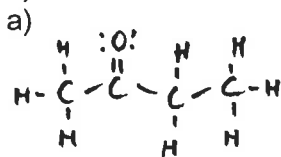
Name _____ p. ____

1) Draw the correct Lewis structure for each of these organic names:

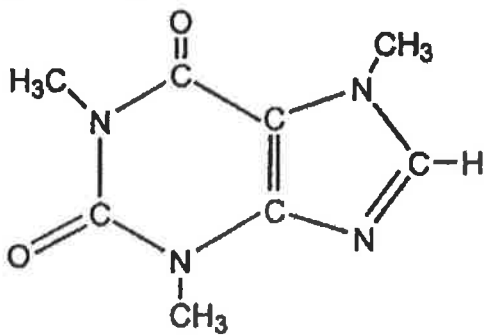
- a) propanone b) dimethyl ether c) ethyl methanoate d) propyl amine

- e) cyclopentane f) benzene g) 1,4 difluoro-benzene h) ethanoic acid (vinegar)

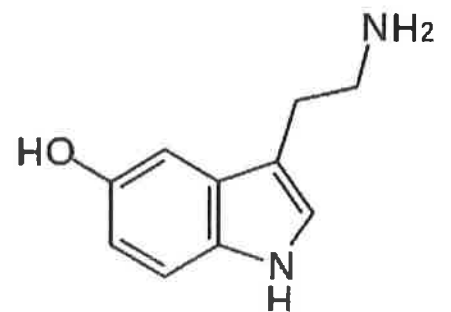
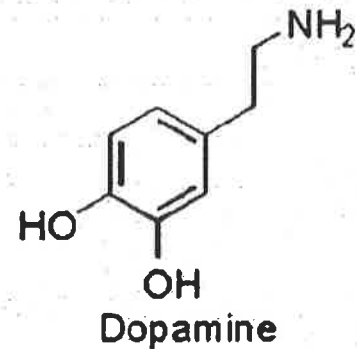
2) Write the correct names for these structures:



3) Circle and label all the functional groups on these molecules:



a) **Caffeine**



serotonin

SEROTONIN & DOPAMINE



Technically, the only two things
you enjoy